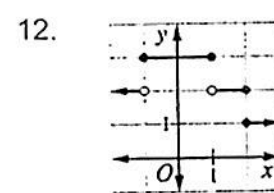
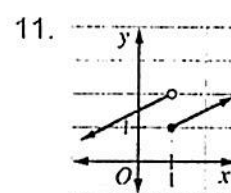
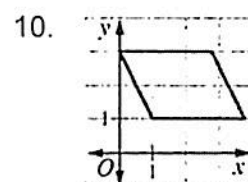
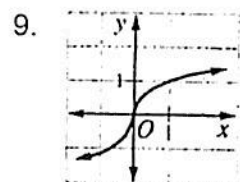
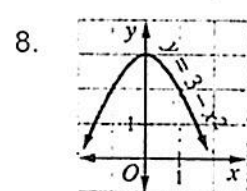
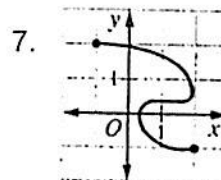
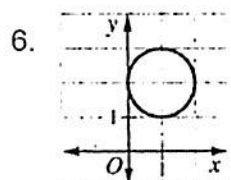
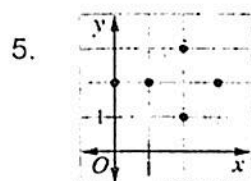
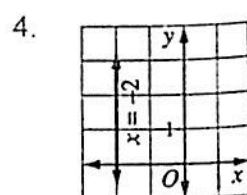
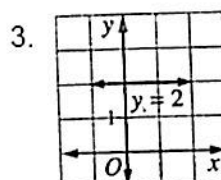
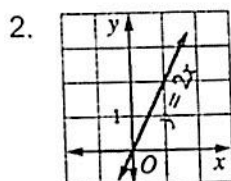
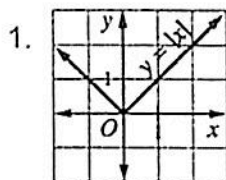


Name: _____
 A2CC Domain and Range

Date: _____
 Ms. Loughran

For numbers 1-12: (a) Determine whether or not each graph represents a function.
 (b) State the domain.
 (c) State the range.



Name: _____
 A2CC Domain and Range Homework

Date: _____
 Ms. Loughran

For numbers 1-12: (a) Determine whether or not each graph represents a function.
 (b) State the domain.
 (c) State the range.

